



MPVM GANGA GURUKULAM


Holiday Homework 2025-26

Class 3



ENGLISH

Q1. Read the story book 'The Postman' then buy a postcard from the post office closest to your house. Write a letter to your grandparents, cousin, uncle or aunt.



Request your parents to take you to the post office to post your post card and also try to meet a postman working there.

Q2. Compose a poem of 6 lines on your favourite topic.

Q3. If you could have a superpower, what would it be and how would you use it? Explain in 4 sentences.

Q4. Look at the picture and write 4 sentences about it.



Q5. Read the story book - How The Path Grew .What have you learnt from the story? Write in 3 sentences.

HINDI

- १ - अपने आस - पास ध्यान से देखिए और पाँच संज्ञा शब्द लिखिए । जैसे - पर्दा - जातिवाचक
- २ - दिए गए शब्दों के चित्र बनाकर उनके पर्यायवाची शब्द लिखिए
सूर्य, पेड़, आकाश, घर, फूल, आँख
- ३ - विलोम शब्द का एक प्लाकार्ड बनाइए जिसके दोनों ओर विलोम का चित्र बना हो यह प्लाकार्ड ६ इंच चौड़ा तथा ६ इंच लंबा हो ।
- ४ - भारत के किन्हीं पाँच राज्यों के राजकीय पुष्प का नाम खोज कर लिखिए ।
- ५ - गर्मी में उगाई जाने वाली सात सब्जियों के नाम लिखिए तथा उनके फायदे भी लिखिए ।

नोट - समस्त कार्य ए - फोर शीट में करिए ।

MATHEMATICS

Q1. Have you observed your mother cutting fruits and vegetables? Observe carefully and write names of some of them which gives you idea of half ($\frac{1}{2}$), one-fourth, ($\frac{1}{4}$) or one-third ($\frac{1}{3}$). Draw or paste pictures to make it more creative.

Q2. Take a rectangular sheet of paper. Try to divide it in two equal parts in as many ways as you can. Colour ($\frac{1}{2}$) part in each case. Do the same for 3 more objects around you which you find symmetrical. Draw or paste the picture of those objects.

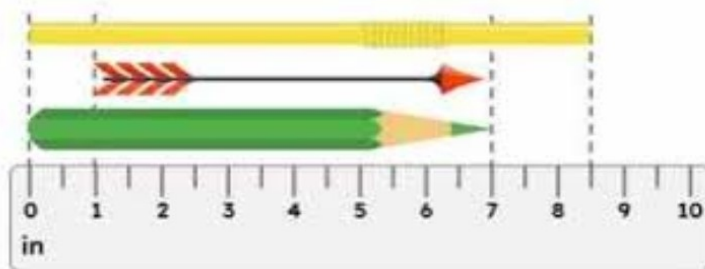
Q3. You and your friends decided to play 'Doctor's role'. You have decided to take turns in playing the doctor's role.

Days	Sunday	Monday	Tuesday	Wednesday	Thursday	Friday	Saturday
Names	You	Bhavya	Sanchi	Prerna	Mayank	Ankush	Vani

Answer the following:

1. Who will be the doctor, the day after Friday?
2. Who will play the doctor's role on the day before Tuesday?
3. Who will be the doctor on the last day of the week?
4. On which day Prerna will become doctor?

Q4. Collect and measure the values using the ruler shown. Answer in True/False-



The straw measures 9 inches.

The arrow measures 8 inches.

The pencil measures 7 inches.

The straw is longer than the arrow.

The pencil is shorter than the straw.

SCIENCE

Q1. Guess the names of different parts of a plant. Take help from the clue box.

R	S	W	O	T	E	D	L	F	A
1	2	3	4	5	6	7	8	9	0


1. The _____ [1 4 4 5 2] of a plant take up water and nutrients from the soil.

2. Leaves in green plants make _____ [9 4 4 7]

3. A _____ [2 6 6 7] grows into a new plant.

4. The _____ [9 8 0 3 6 1 2] produce fruits and seeds.


Q2. Collect some leaves of different shapes and sizes. Stick them with glue to give shapes of different animals, like the one given here. Do not copy the example.



Q3. Using a disposal paper plates , make a bird mask of your choice. You can take help of an elder. Use colours and other decorative items to make your work more creative. One example has been given for you. Do not copy the example.




Q4. Spot the hidden animals. Many animals live in the wildlife sanctuary. Find and colour the animals.



S.ST.

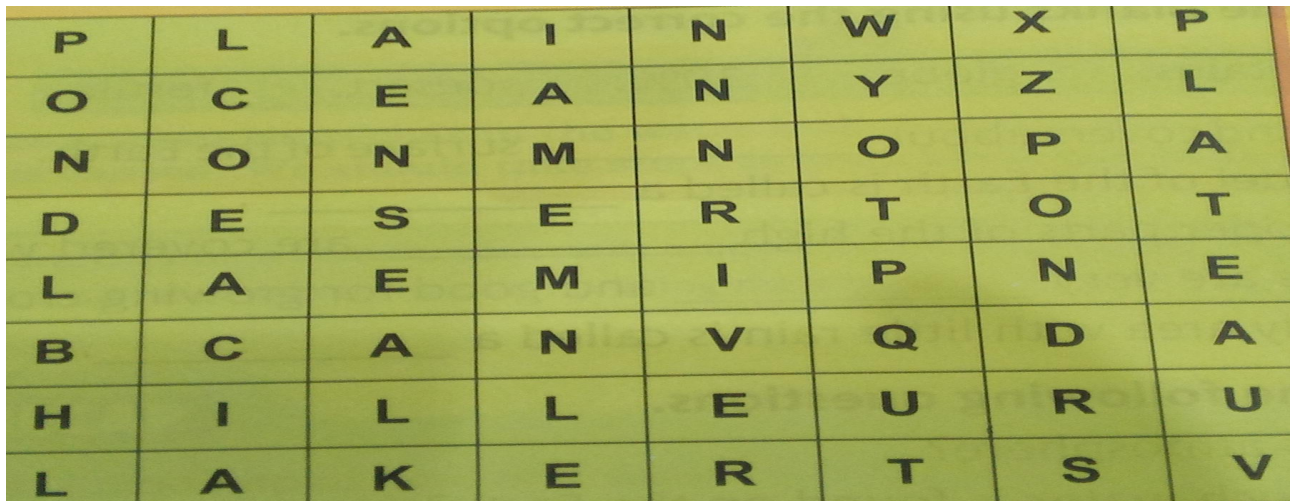
Q1. Which festival are these children talking about:-



Q2. Make a tricolour badge using the colours of the Indian national flag. You can use cloth, coloured paper and any other available items.



Q3. Find the names of 4 landforms and 4 water bodies in the given word search:-

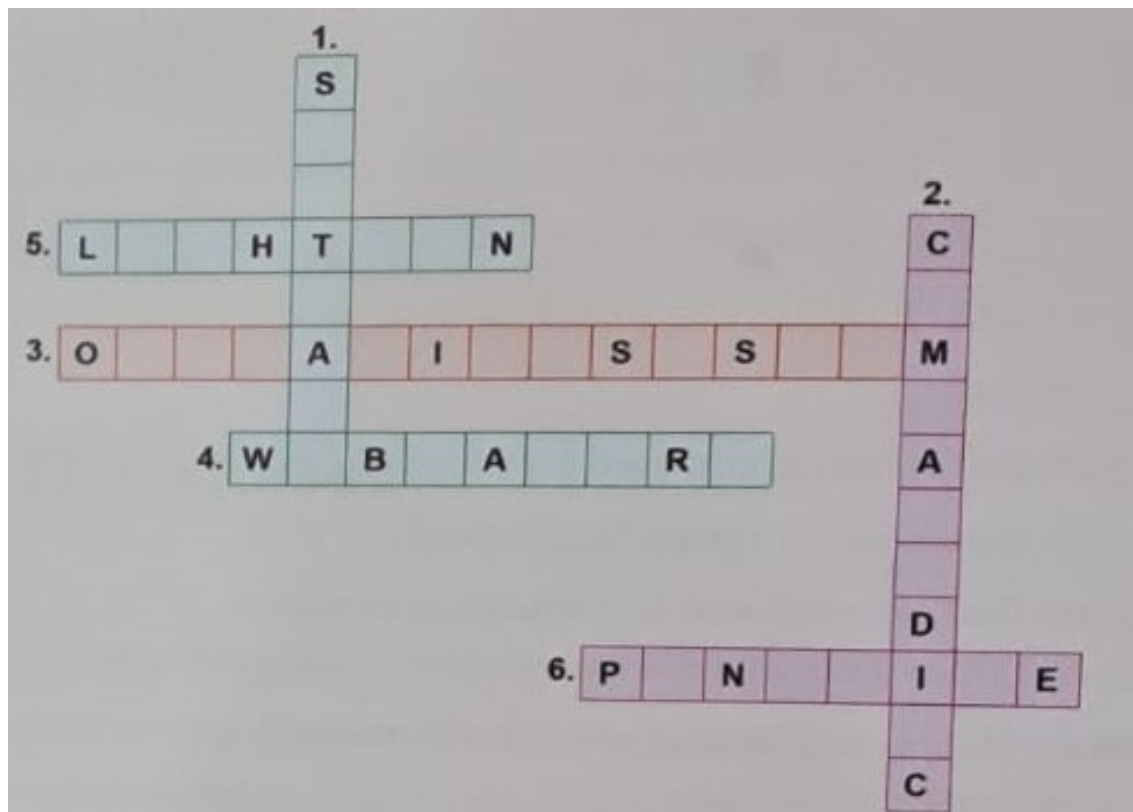


Q4. Make tools and jewellery of early man by using wet soil.

COMPUTER

Q1. Complete the words given below with the help of the given clues:-

1. I am a part of a computer that cannot be touched.
2. I am a round , flat and shiny disc that is used to store a lot of information.
3. I am the system software that makes a computer run.
4. You use me to share pictures and have a live chat.
5. I look like a pen that you use on a special pad.
6. I am small in size and can transfer data from one computer to another.



Q2. Name and Classify the following devices in the columns below:-



Input Devices	Output Devices	Processing Device	Storage Devices

Q3. Collect any two computerised bill of any two places where you have visited with your parents and paste it in this worksheet.

A colorful illustration of a beach scene. In the center, a large white oval frame contains the word 'HAPPY' in red, serif, all-caps font. Below the frame, three children are standing on a small patch of brown sand. On the left, a boy with brown hair, wearing blue shorts with yellow stars, holds a corn on the cob. In the middle, a girl with blonde hair, wearing a pink top and blue skirt, wears a straw hat. On the right, a boy with brown hair, wearing a red and white striped shirt, holds a blue and yellow striped inflatable ring. Behind them are two beach umbrellas: one with red and yellow stripes on the left, and one with red and white stripes on the right. A blue and red surfboard is leaning against the right umbrella. The background features a bright orange and yellow sky with stylized clouds, and a blue ocean with white-capped waves at the bottom. The word 'SUMMER' is written in large, colorful, 3D block letters across the sand: 'S' is yellow, 'U' is red, 'M' is green, 'M' is blue, 'E' is pink, and 'R' is orange. Several seashells are scattered on the sand.

HAPPY

HOLIDAYS